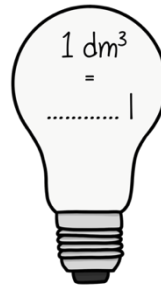




Les 35 INHOUD VISSENKOM BEREKENEN

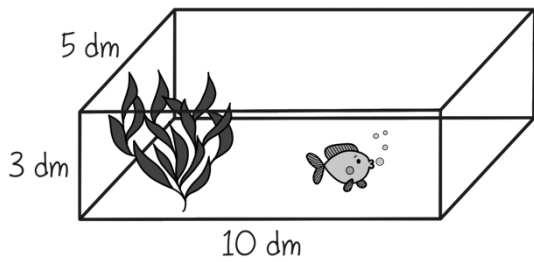


1 Met welke formule bereken je de inhoud?

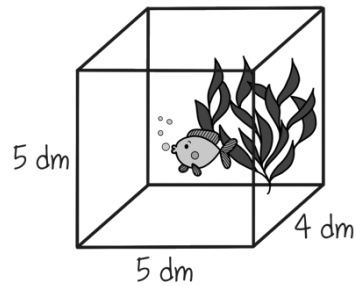


2 Vul de lampenbol in.

☆ Gebruik de formule om de inhoud te berekenen.
Schrijf de som op.

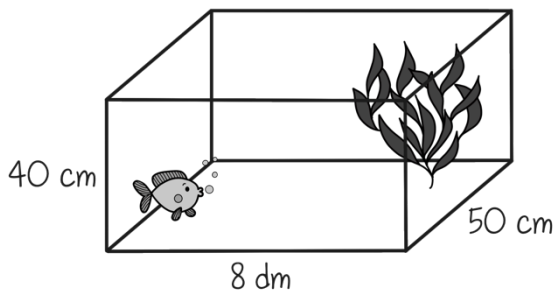


_____ x _____ x _____ = _____ dm³
 _____ dm³ = _____ l

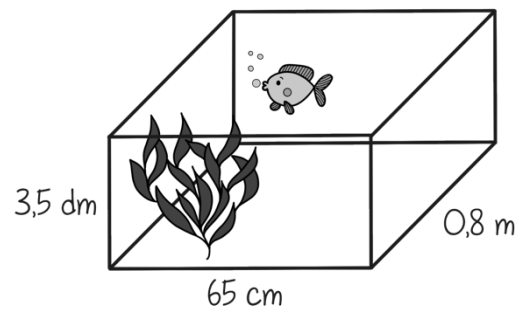


_____ x _____ x _____ = _____ dm³
 _____ dm³ = _____ l

★ Hoeveel liter water past er in de vissenkom?



_____ l



_____ l